



IEM - 5/23

SECTION - A
(General English)

Direction (Q. No. 1 to 4) : In the following questions part of the sentence is underlined. Choose the correct alternative to replace the underlined part without changing the meaning of the sentence. In case no improvement is needed your answer should be (d).

1. You must carry on my order.
(a) carry off
(b) carry out
(c) carry of
(d) no improvement
2. Sanjana could not solve the problem at all and was at her wit's ending.
(a) her wit's end
(b) the wit ends
(c) her witty end
(d) no improvement
3. Hari is the only man I know who can laugh at himself.
(a) whose
(b) whom
(c) which
(d) no improvement
4. After a great deal of effort Uma finally managed to success in her venture.
(a) managing to succeed
(b) managed to succeed
(c) managing to success
(d) no improvement

Direction (Q. No. 5 to 7) : Rearrange the following sentences to form a meaningful passage.

5. A) He was so busy with them that he did not get time to eat.
B) Thousands of people came to him and asked different types of questions.
C) No one cared to see that he had his food or rest that night.
D) Swami Vivekananda once stayed in a small village.
(a) B C D A
(b) C B A D
(c) D B A C
(d) D B C A



NORTHEAST PSC



YET ANOTHER PROOF OF EXCELLENCE!!!

20+ Selections in Personal Assistant (Stenographer) 2024

Highest from a single institute

- ONLINE AND OFFLINE COURSES AVAILABLE:
- MENTORED 10000+ ASPIRANTS
- QUALITY TEACHING AT AFFORDABLE PRICES
- EXPERIENCED FACULTIES

PREMIUM INSTITUTE FOR APPSC AND APSSB EXAMS



MUM TAMUT
2000014



GERIK BASAR
2000056



MISS ETER RIBA
2000074



BINAISI CHAI
2000059



MINU ANGU
2000049



REVA GAMLIN
2000030



MIBOM KOMUT
2000005



MARJUM LOMI
2000068



DURIK BAGRA
2000067



TAPI YAKU
2000069



TABE NAINA
2000057



TAILYANG MAMPI
2000052



HAGE MAMUNG
2000035



KAGO SUNKA
2000063



PURA ASHA
2000055



RANG FOSHING MARNDW
2000040



TAMHE NENKHA
2000053



GEYI INGO
2000075



NAKO NONYA
2000077



JUMNU TAIPODIA
2000004



KARI ESHI
2000036



YABIT TAGA
2000006



TUNDAK ANGU
2000062



ETER RIBA
2000074



BARJONI RATAN
2000019

Call/WhatsApp: +91-9233789183 / 9863184505 / 8076535685

Our 3 Students in Top 10 Rank

NORTHEAST PSC

YET ANOTHER PROOF OF EXCELLENCE!!!

140+ SELECTIONS IN CSL 2023

- Online and Offline Courses Available:
- Mentored 10000+ Aspirants
- Quality Teaching at Affordable Prices
- Experienced Faculties

Premium
Institute for
APPSC and
APSSB Exams



OUR OTHER ACHIEVERS COULDN'T BE
FEATURED HERE DUE TO SPACE
CONSTRAINTS!!!

Call/WhatsApp: +91-9233789183 / 9863184505 / 8076535685

Visit Us: NEPSC Building 2nd Floor, Opp Civil
Secretariat, Near Bank of Maharashtra, Itanagar (A.P.)



6. A) It results from a carefully revised plan.
 B) Men work together for a cause or purpose.
 C) Team work does not just happen.
 D) It must be clearly known to them.
 (a) B C A D (b) C B D A
 (c) B G D A (d) C A B D

7. A) He had inherited that money from an uncle.
 B) Mr. Maini was an innocent man.
 C) It was regarding investing ten thousand rupees in my firm.
 D) He agreed to my proposal.
 (a) D C A B (b) B A D C
 (c) C D A B (d) B D C A

Direction (Q. No. 8 to 11) : Fill in the blanks with appropriate words from the alternatives given below them.

8. She tried her best ; _____ she couldn't succeed.
 (a) besides (b) incase (c) however (d) as long as
9. A student will fail _____ he doesn't work hard.
 (a) because (b) if (c) until (d) though
10. The shopkeeper doesn't have the toys, I was looking _____.
 (a) by (b) about (c) for (d) to
11. His birthday is _____ next Sunday.
 (a) in (b) at (c) on (d) for

Direction (Q. No. 12 to 15) : Choose the correct one word substitution for the following from the alternatives given below them.

12. A small shop that sells fashionable clothes, cosmetics, etc.
 (a) Store (b) Department (c) Boutique (d) Shop
13. Persons working in the same office.
 (a) Staff (b) Employees (c) Colleagues (d) Worker
14. A group of people who sing together.
 (a) Choreography (b) Colloquial
 (c) Coast (d) Chorus

15. One who is incharge of a museum.
(a) Curator (b) Supervisor (c) Caretaker (d) Warden

Direction (Q. No. 16 to 19) : Each of the following sentences has been split into four parts and parts have been presented in a jumbled form. Choose the correct answer from the alternatives to form a meaningful sentence.

16. of their passions/is a knowledge/knowledge/of mankind
(1) (2) (3) (4)
(a) 3, 2, 4, 1 (b) 3, 4, 2, 1 (c) 1, 3, 4, 2 (d) 4, 3, 2, 1

17. will normally be granted/candidates should note/that no request for/
change of centre
(1) (2) (3)
(a) 1, 3, 2, 4 (b) 2, 3, 4, 1 (c) 4, 2, 3, 1 (d) 3, 2, 1, 4

- (18) through the long, hot summer/if you plan to train hard/continually/
you will need to acclimatise yourself first
(1) (2) (3)
(a) 2, 3, 1, 4 (b) 3, 1, 2, 4 (c) 4, 2, 1, 3 (d) 1, 3, 2, 4

19. what matters/the attainment of the goal/in philosophy is not/
but the things that are met with by the way
(1) (2) (3)
(a) 3, 1, 4, 2 (b) 1, 2, 4, 3 (c) 4, 3, 1, 2 (d) 1, 3, 2, 4

Direction (Q. No. 20 and 21) : Choose the correct passive forms of the given sentences from the alternatives given below them.

20. How do people learn languages ?
(a) How language was learnt ?
(b) How was language learnt ?
(c) How had been languages learnt ?
(d) How are languages learnt ?

21. Nobody told me that George was ill.
- (a) I didn't know that George was ill.
 - (b) It had told that George was ill.
 - (c) I was not told that George was ill.
 - (d) I had not been told that George was ill.

Direction (Q. No. 22 and 23) : Fill in the blanks with appropriate words to make the following sentences meaningfully appropriate by changing their voice.

22. The hunters have saved many a person from the man-eaters.
Many a person _____ from the man-eaters by the hunters.
- (a) have been saved
 - (b) had been saved
 - (c) has saved
 - (d) has been saved

23. She would reject the offer.
The offer _____ by her.
- (a) will have been rejected
 - (b) will be rejected
 - (c) would have been rejected
 - (d) would be rejected

Direction (Q. No. 24 to 26) : Choose the Synonyms of the underlined words from the given alternatives.

24. The river banks are abundant in beautiful wild plants.
- (a) desert
 - (b) avoid
 - (c) plentiful
 - (d) daring
25. The whole situation is down right bizarre.
- (a) unusual
 - (b) recoil
 - (c) careless
 - (d) none of these
26. There was adequate rain and snow last winter.
- (a) sufficient
 - (b) lack
 - (c) plenty
 - (d) low

Direction (Q. No. 27 to 30) : Choose the correct expression and replace the underlined word.

27. He is such a strange person that we can't expect anything positive from him.
- (a) right and left
 - (b) queer fish
 - (c) out of gear
 - (d) safe and sound

28. Before signing this agreement you must understand all merits and demerits well.

- (a) need of the hour
- (b) nook and corner
- (c) pros and cons
- (d) out and out

29. The speech of the leader was full of extreme enthusiasm.

- (a) cock and bull story
- (b) fair and square
- (c) fire and fury
- (d) fabian policy

30. It is better to get everything in writing.

- (a) black and white
- (b) back and call
- (c) by fits and starts
- (d) none of the above

Direction (Q. No. 31 to 34) : Choose the correct reported speech for the sentences from the alternatives given below them.

31. He said, "Kashmir is in the North of India".

- (a) He asked that Kashmir was in the North of India.
- (b) He enquired that Kashmir has been in the North of India.
- (c) He said that Kashmir is in the North of India.
- (d) He said that Kashmir was in the North of India.

32. Ram said to Roy, "I shall have been reading the book".

- (a) Ram said to Roy that he should be reading the book.
- (b) Ram said to Roy that he would reading the book.
- (c) Ram told Roy that he would have read the book.
- (d) Ram told Roy that he would have been reading the book.

33. She said, "Two and two is four".
(a) She told that two and two is four.
(b) She said that two and two was four.
(c) She said that two and two is four.
(d) None of the above
34. Leela said to Reena, "You were playing tennis".
(a) Leela said to Reena she was playing tennis.
(b) Leela told Reena she was playing tennis.
(c) Leela told Reena that she was playing tennis.
(d) Leela told Reena that she had been playing tennis.

Direction (Q. No. 35 to 39) : Given below is a passage in which missing words are represented by numbered blanks. Below the passage, against each number are suggested four alternatives, only one of which fits the blank appropriately. Find out the appropriate alternative in each case.

As we are poised to enter the 21st Century with all its scientific break throughs and technological 35 visibly 36 our day-to-day lives in every possible way, it may look ridiculously simple to talk about a 37, routine thing like controlling high blood pressure. In fact, today's "high society" may like to talk about more 'fashionable' diseases than the ordinary "high blood pressure" problem. Yet, there is more to it than 38 the eye. For one, have you ever wondered why some people develop high blood pressure while others don't? Even this may look like a 39 question on the face of it.

35. (a) gizmos (b) marvels (c) competence (d) wizardry
36. (a) afflicting (b) ameliorating (c) insinuating (d) affecting
37. (a) scientific (b) mundane (c) universal (d) lethargic
38. (a) deserves (b) discerns (c) strikes (d) meets
39. (a) usual (b) sane (c) remote (d) silly

Direction (Q. No. 40 to 43) : Choose the correctly spelt word from the following.

40. (a) Dyslexia (b) Dislexia (c) Dislaxea (d) Dyslexea
41. (a) Intellegant (b) Intallegent (c) Intelligent (d) Intallegant
42. (a) Germicide (b) Germecece (c) Germecide (d) Germeside
43. (a) Aqariam (b) Aquarium (c) Aqarium (d) Aquiriam

Direction (Q. No. 44 to 47) : Choose the erroneous part of the sentences from the given alternatives.

44. I cannot/make from/what you are saying/about him.

- (a) (b) (c) (d)

45. It was evident/to me that there/was any mistake/in that account.

- (a) (b) (c) (d)

46. The visitors/complained at/the poor accommodation/they were given.

- (a) (b) (c) (d)

47. Krishna is/the taller boy/in the class./No error

- (a) (b) (c) (d)

Direction (Q. No. 48 to 50) : Fill in the blanks with the correct Antonyms of the underlined words in the sentences.

48. We thought we could buy fresh cakes from the bakery but we found they were _____.

- (a) burnt (b) stale (c) uncooked (d) sweet

49. Confession of mistakes is better than _____.

- (a) acceptance (b) silence (c) denial (d) reveal

50. Arrogant people can't make _____ requests.

- (a) bold (b) strong (c) humble (d) careless



NORTHEAST PSC



**Congratulations to all our selected warriors in
CHSL 2023!!!!**

OUR SELECTED WARRIORS:



CHIGO BASAR
LDC - Public work
Dept.



Rei kango
LDC - Transport



Kerpi besar
Agriculture Field
Assistant Jr.



ANAMSO KRI
LDC - Transport



Jaya Modi
LDC - Chief Electoral
office



Samuel langlang
LDC - TRIHMS



Olak Jamro
LDC - Chief
Electoral office



TONI TALOH
Junior Secretarial Assistant -
Secretarial Administration



Linu Kato
LDC



Bokin lego
LDC - Arunachal Pradesh
Information commission



Dymang Apum
Data Entry Operator - Chief
Electoral office



Pinky Raji
LDC - Chief Electoral
Office



Takhe Kanya
LDC - Public Work
Department



RUBU SUNYA
Data Entry Operator - Chief
electoral office



TABA KAGI
LDC - Chief Electoral
office



MUMTAK MIGU Data
Entry Operator at
Chief Electoral Office



Salim Chowlu
LDC - Public work
Department



GYANI BINKY
LDC - Fire & Emergency
Services



KARSING PERME
LDC - Chief Electoral
Office



HAGE LOTUS
LDC - Agriculture



MARGO KAMKI
LDC - Chief Electoral
office



DANI TA-JANG
Data Entry Operator at
Chief Electoral Office

SECTION - B
(Elementary Mathematics)

51. Which of the following is not true ?
(a) Congruent triangles are also similar
(b) Similar triangles are not congruent
(c) If 2 pairs of angles are equal in two triangles, then 3rd pair should also be equal
(d) None of these

52. π° in degrees is
(a) 180° (b) 90° (c) 3.14° (d) $\frac{22^\circ}{7}$

53. Area of an equilateral triangle of side 6 cm is (in sq. cm)
(a) 18 (b) $18\sqrt{3}$ (c) $9\sqrt{3}$ (d) None of these

54. If the angles of quadrilateral are in the ratio 3 : 5 : 9 : 13, then find the smallest angle.
(a) 13° (b) 30° (c) 15° (d) 36°

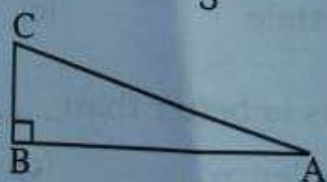
55. The sum of all interior angles of a simple polygon with n sides is
(a) $(n-2) \times 180^\circ$ (b) $(n-1) \times 90^\circ$
(c) $(n-1) \times 180^\circ$ (d) $(n-2) \times 90^\circ$

56. The value of $(-2)^3 + (-3)^3 + 5^3$ is
(a) 90 (b) 25 (c) 200 (d) -195

57. The value of $\left(\frac{x}{y}\right)^{\frac{1}{2}} \left(\frac{y}{x}\right)^{\frac{1}{2}}$ is
(a) 0 (b) $\frac{1}{4}$ (c) 1 (d) -1

58. If $\sin \theta = \frac{4}{5}$ where $0 < \theta < 90^\circ$, then $\cos \theta =$
(a) $\frac{3}{5}$ (b) $\frac{5}{4}$ (c) $\frac{5}{3}$ (d) $\frac{-3}{5}$

59. In a right angled triangle ABC if $AB = 24$ and $BC = 7$, then $\tan A =$

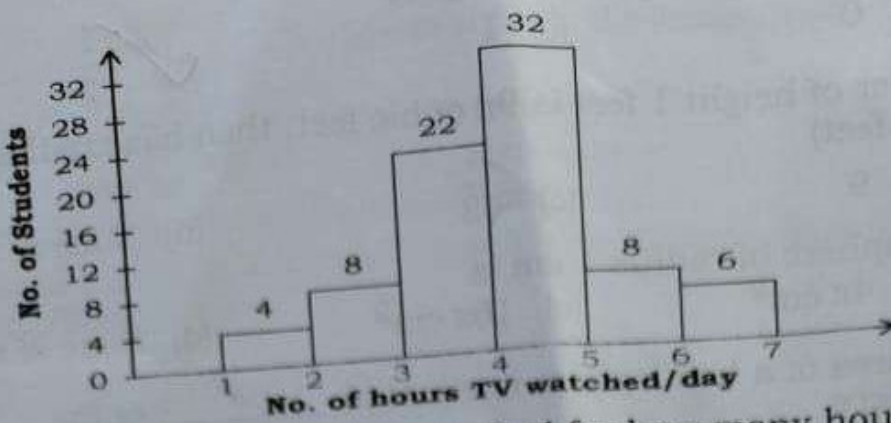


(a) $\frac{24}{7}$ (b) $\frac{7}{24}$ (c) $\frac{25}{24}$ (d) $\frac{24}{25}$

60. The value of $\sin 45^\circ \cdot \cos 45^\circ + \tan 45^\circ \cdot \cot 45^\circ$ is
 (a) 2 (b) 0 (c) 1 (d) $1\frac{1}{2}$
61. If volume of a cylinder of height 1 feet is 9π cubic feet, then base radius of the cylinder is (in feet)
 (a) 3 (b) 9 (c) $\sqrt{3}$ (d) None of these
62. The surface area of sphere of radius 1 cm is
 (a) $\pi \text{ cm}^2$ (b) $4\pi \text{ cm}^2$ (c) $16\pi \text{ cm}^2$ (d) None of these
63. The curved surface area of a hemisphere is equal to _____ of the surface area of a sphere.
 (a) $\frac{1}{2}$ (b) $\frac{3}{4}$ (c) $\frac{1}{4}$ (d) $\frac{1}{3}$
64. A rectangular parallelepiped is also known as
 (a) Cube (b) Cuboid (c) Sphere (d) Cylinder
65. A solid whose base is a polygon (triangle or square) and lateral faces are triangles is called
 (a) Prism (b) Pyramid (c) Cube (d) Cuboid
66. The graph of $x = 3$ is a line
 (a) parallel to the x-axis (b) parallel to the y-axis
 (c) passing through the origin (d) none of these
67. The graph of $2x - 3y = 6$ meets the x-axis at the point
 (a) (0, 3) (b) (-2, 0) (c) (-3, 0) (d) (3, 0)
68. The image of (3, 2) w.r.t. the line $y = x$ is
 (a) (3, -2) (b) (-3, -2) (c) (-2, 3) (d) (2, 3)
69. The largest chord in a circle is its
 (a) radius (b) diameter (c) secant (d) tangent
70. If ΔABC and ΔDEF are similar and their areas are 64 cm^2 and 121 cm^2 respectively with $EF = 15.4 \text{ cm}$, then $BC =$
 (a) 10 cm (b) 11.2 cm (c) 8 cm (d) None of these
71. A diameter subtends an angle of _____ at the circumference of the circle.
 (a) 60° (b) 120°
 (c) 90° (d) None of these



72.



From the above histogram, find for how many hours did the maximum number of students watch TV ?

(a) 4-5 hrs

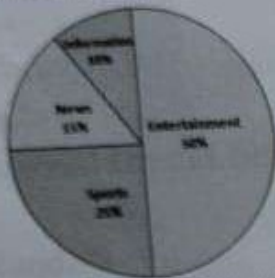
(b) 3-4 hrs

(c) 5-6 hrs

(d) None of these

73.

Viewers watching different types of channels on TV



From the above pie chart, find which 2 types of programmes have number of viewers equal to those watching sports channel ?

(a) News and Information

(b) News and Entertainment

(c) Information and Entertainment

(d) None of the above

74. In a particular Section of Class 8, 40 students were asked about the months of their birth and represented in the bar graph below :



From the above bar graph, find in which month least number of students were born ?

(a) August

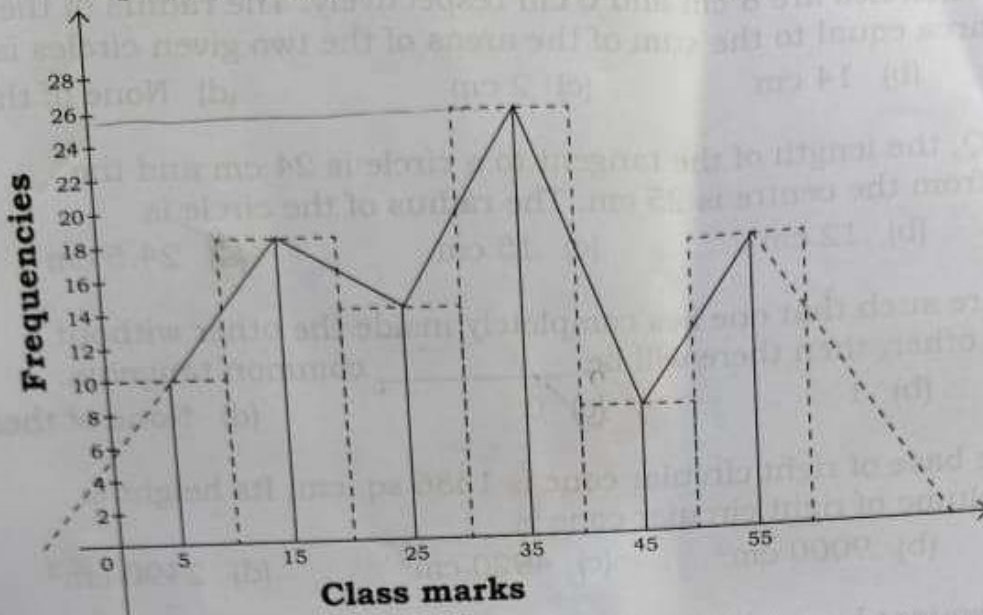
(b) June

(c) October

(d) November

C

75. The frequency polygon of frequency distribution is shown below :



From the above frequency polygon figure, find the frequency of class interval whose class mark is 35.

- (a) 30-40 (b) 40-50 (c) 10-40 (d) None of these

76. If total profit after selling shares of a company is ₹ 60,000 and Mr. Bean's share is $\frac{2}{3}$ rd that of Mr. John, then Mr. John's share is (Bean and John are the only shareholders)

- (a) Rs. 24,000 (b) Rs. 36,000 (c) Rs. 28,000 (d) Rs. 32,000

77. If 20 kgs of tea costing Rs. 150 per kg is mixed with 30 kgs of another tea costing Rs. 120 per kg, then cost of 1 kg of mixture is

- (a) Rs. 130 (b) Rs. 140 (c) Rs. 132 (d) Rs. 175

78. Two men A and B start from a place walking at 5 km and 6 km an hour respectively. How many km will they be apart at the end of 4 hours if they walk in the opposite directions ?

- (a) 4 km (b) 44 km (c) 30 km (d) 36 km

79. If 10 men can build a wall in 20 days, then 20 men can build the same wall in

- (a) 40 days (b) 10 days (c) 5 days (d) 12 days

80. The value of $(\sqrt{3} - \sqrt{5})(\sqrt{3} + \sqrt{5})$ is

- (a) -2 (b) 2 (c) 1 (d) $-\sqrt{2}$



NEW BATCH



for CGL | CSL | CHSL (APSSB Exams)

ATTEND FREE DEMO CLASS

- Elementary Maths
- Intelligence Reasoning
- General Knowledge
- General English



➤ **140+ SELECTED IN CSL 2023**

➤ **20+ SELECTED IN CHSL 2023**

➤ **25 SELECTED IN STENOGRAPHER 2024**

*Based on Latest
Pattern of
APSSB*

Next could be you!!!!

Our Features:-

- Live Classes
- Backup in recordings of Live classes
- PDF Notes & Practice Questions
- 2000 GK Booster Questions (with Video Solutions)
- FREE TEST SERIES (with Video Solutions)

 **Call / WhatsApp:** 

+91-8076535685 / 6009526445



81. The radii of two circles are 8 cm and 6 cm respectively. The radius of the circle having area equal to the sum of the areas of the two given circles is
 (a) 10 cm (b) 14 cm (c) 2 cm (d) None of these
82. From a point Q, the length of the tangent to a circle is 24 cm and the distance of Q from the centre is 25 cm. The radius of the circle is
 (a) 7 cm (b) 12 cm (c) 15 cm (d) 24.5 cm
83. If two circles are such that one lies completely inside the other without touching each other, then there will be _____ common tangents.
 (a) 2 (b) 1 (c) 0 (d) None of these
84. The area of the base of right circular cone is 1386 sq. cm. Its height is 20 cm, then volume of right circular cone is
 (a) 9240 cm³ (b) 9000 cm³ (c) 4920 cm³ (d) 2490 cm³
85. A prism has a square base whose side is 6 cm. Its height is 10 cm. The total surface area of the prism is (in sq. cm.)
 (a) 240 (b) 312 (c) 200 (d) 440
86. The ratio 1 : 4 in percentage form is
 (a) 40% (b) 1.4% (c) 25% (d) 22%
87. If $a : b = 2 : 3$ and $b : c = 6 : 7$, then $a : c =$
 (a) 12 : 7 (b) 4 : 7 (c) 7 : 12 (d) 7 : 4
88. The number of whole numbers between 9 and 17 is
 (a) Infinite (b) 8 (c) 7 (d) 9
89. The recurring decimal 0.333... is same as
 (a) $\frac{3}{10}$ (b) $\frac{3}{100}$ (c) $\frac{1}{3}$ (d) None of these
90. A rational number between $\frac{1}{4}$ and $\frac{3}{4}$ is
 (a) $\frac{1}{5}$ (b) $\frac{4}{5}$ (c) $\frac{1}{2}$ (d) None of these
91. Simplified form of $\frac{1 + \tan^2 \theta}{1 + \cot^2 \theta}$ is
 (a) $\tan^2 \theta$ (b) $\cot^2 \theta$ (c) $\sec^2 \theta$ (d) $\operatorname{cosec}^2 \theta$



92. The value of $\frac{\sin 70^\circ}{\cos 20^\circ}$ is
 (a) -1 (b) 0 (c) 1 (d) 2
93. A tower casts shadow of length 300 ft when the sun's altitude (angle of elevation) is 45° . The height of the tower must be
 (a) $300\sqrt{3}$ ft (b) $\sqrt{3}$ ft (c) 100 ft (d) 300 ft
94. The internal bisectors of the angles of a triangle meet at a point called _____ of the triangle.
 (a) Orthocentre (b) Incentre (c) Centroid (d) Circumcentre
95. The area of the triangle with sides 3 cm, 4 cm and 5 cm is
 (a) 12 cm^2 (b) 6 cm^2 (c) 6.5 cm^2 (d) None of these
96. If $x - \sqrt{225} = 18$, then $x =$
 (a) 43 (b) 33 (c) 53 (d) 83
97. The average of first 5 natural numbers is
 (a) 15 (b) 13 (c) 3 (d) 7.5
98. The amount Mr. Krishna gets if he invests Rs. 50,000 at 7.5% p.a. simple interest for 2 years is
 (a) Rs. 57,500 (b) Rs. 50,750
 (c) Rs. 57,750 (d) None of these
99. On selling a kg of rice for Rs. 80, a trader gains a profit of 25%. The cost price of rice per kg is
 (a) Rs. 64 (b) Rs. 54 (c) Rs. 60 (d) Rs. 66
100. If the price of pair of trousers at a discount of 22% is Rs. 390, then the original price (market price) is
 (a) Rs. 500 (b) Rs. 550
 (c) Rs. 450 (d) None of these

SECTION - C
(General Knowledge)

101. The National Aeronautics and Space Administration (NASA) is the space agency of
(a) United States of America (b) Russia
(c) India (d) Europe
102. The Neutron is discovered by
(a) E. Goldstein (b) E. Rutherford
(c) Sir James Chadwick (d) J.J. Thomson
103. The UN special agency established for the welfare of children in the world
(a) WHO (b) UNICEF
(c) UNESCO (d) UNEP
104. The UNFCCC reached a landmark agreement to combat climate change on 12th December 2015 in
(a) Nairobi (b) Johannesburg (c) Paris (d) New York
105. The headquarter of Food and Agricultural Organisation is located in
(a) New York (b) Geneva
(c) Washington (d) Rome
106. Ajanta-Ellora caves are located in which of the following State ?
(a) Andhra Pradesh (b) Karnataka
(c) Kerala (d) Maharashtra
107. Who is called as 'Father of Indian Modern Art' ?
(a) Ram Kumar (b) M. F. Husain
(c) Rabindranath Tagore (d) Raja Ravi Varma
108. Hari Prasad Chaurasia is a most famous musician in the instrument of
(a) Saxophone (b) Flute
(c) Violin (d) Shahanai



109. In the production of raw materials, the money in hand is called
 (a) Fixed capital (b) Natural capital
 (c) Working capital (d) Financial capital
110. The present Governor of RBI is
 (a) Shaktikanta Das (b) Urjith Patel
 (c) Nirmala Seetharaman (d) None of the above
111. Which one of the following country is not in the 'Quad' ?
 (a) Russia (b) India
 (c) Australia (d) Japan
112. 'Meteorology' is a science of
 (a) Soil (b) Lakes
 (c) Weather (d) Rivers
113. The Atacama desert is in
 (a) Brazil (b) South Africa
 (c) Congo (d) Chile
114. The longest and largest river of Peninsular India
 (a) Krishna (b) Cauvery (c) Ganga (d) Godavari
115. The Amendment which incorporated fundamental duties to Indian Constitution
 (a) 21st (b) 44th (c) 42nd (d) 61st
116. Where was the Golden Jubilee Cabinet Meeting held ?
 (a) Pasighat (b) Itanagar (c) Ziro (d) Namsai
117. Who among the following was the first nominated member of Parliament (Lok Sabha) from Arunachal Pradesh ?
 (a) O. M. Deori (b) Chow Khamoon Gohain
 (c) Nyari Welly (d) P. K. Thungan

NORTHEAST PSC



118. In 2018, Pakke-Kessang district was carved out of
(a) Lepa Rada
(c) West Kameng
(b) East Kameng
(d) Upper Dibang
119. Losar, Solung, Dree and Chalo-Loku are the main festivals of which of the following State ?
(a) Assam
(c) Arunachal Pradesh
(b) Manipur
(d) Nagaland
120. The Ntangki National Park is located in the State of
(a) Manipur
(c) Himachal Pradesh
(b) Arunachal Pradesh
(d) Nagaland
121. The Doctrine of Lapse policy was introduced by
(a) Lord Wellesley
(c) Lord Cornwallis
(b) Lord Dalhousie
(d) Robert Clive
122. Which place did Vasco da Gama reach first in India in 1498 ?
(a) Calicut
(c) Madras
(b) Bombay
(d) Goa
123. The Brahma Samaj was established by
(a) Dayananda Saraswathi
(c) Swami Vivekananda
(b) Raja Ram Mohan Roy
(d) Jyothiba Phule
124. Which day is observed as the International Day of Yoga ?
(a) 21st June
(c) 23rd September
(b) 24th July
(d) 24th April
125. The host of the highly anticipated 2023 Squash World Cup is
(a) Bengaluru
(c) Delhi
(b) Hyderabad
(d) Chennai
126. The Tata group and Singapore Airlines (SIA) announced to merge this Airlines with Air India
(a) Indigo
(c) King Fisher
(b) Spice Jet
(d) Vistara



NORTHEAST PSC

Maths & Reasoning Batches

ONLINE BATCH



Do WhatsApp/Call at +91-8076535685
for joining course

INCLUDES

- ✓ Result Oriented Approach
- ✓ Basic to Advance
- ✓ Live and Recorded Class
- ✓ Based on new pattern

USEFUL FOR

- ✓ APSSB (LDC/ UDC/ CONSTABLE/ MTS)
- ✓ CSAT
- ✓ SSC
- ✓ BANK



AMARJEET SIR

SPECIAL OFFER

MATHS ONLY

(6 Months Validity)

FEE: ~~₹ 2000/-~~

₹ 2500/-

REASONING ONLY

(6 Months Validity)

FEE: ~~₹ 2000/-~~

₹ 2500/-

MATHS + REASONING

FEE: ~~₹ 5000/-~~

₹ 4500 - NEW STUDENTS

₹ 4000 - OLD STUDENTS

127. The brightest star in the Sky is

(a) Sirius

(c) Cetus

(b) Orion

(d) Aries

128. Which of the following disease is not caused by Bacteria ?

(a) Cholera

(b) Typhoid

(c) Chickenpox

(d) Tuberculosis

129. The Atomic number of the element Sodium is

(a) 11

(b) 12

(c) 13

(d) 19

130. The first Asian country to reach Mars in its first attempt

(a) USA

(b) China

(c) India

(d) Japan

131. The 86th Amendment Act of 2002 of Indian Constitution is related to

(a) Right to Education

(b) Panchayathraj System

(c) Voting Rights

(d) Anti Defection Law

132. The oath of office to President of India is administered by

(a) Prime Minister

(b) Speaker of Lok Sabha

(c) Chief Justice of Supreme Court

(d) Vice President

NORTHEAST PSC

133. Lionel Messi one who recently won the Best FIFA Men's player award representing Football team of

(a) France

(b) Brazil

(c) Argentina

(d) Italy

134. The country which won Women T20 World Cup 2023

(a) Australia

(b) England

(c) South Africa

(d) India

35. The cricketer who holds the record of making the most centuries in IPL

(a) Shubhman Gill

(b) Virat Kohli

(c) Chris Gayle

(d) Jos Buttler



136. Which confirmatory test was used to detect COVID-19 ?
(a) ELISA
 (c) RtPCR
(b) LFT
(d) mRNA
137. Morten Meldal one who won the Nobel Prize in Chemistry 2022 belongs to
(a) Israel
 (c) Denmark
(b) United States
(d) Norway
138. Time Magazine's 2022 person of the year is
(a) Joe Biden
(c) Vladimir Putin
 (d) Volodymyr Zelensky
(b) Narendra Modi
139. 'Geetanjali' is well renowned work of which of the following authors ?
(a) Dr. Rajendra Prasad
(c) Vinoba Bhave
 (b) Rabindranath Tagore
(d) Dadabhai Naoroji
140. The 50th anniversary of World Environment Day 2023 is hosted by Côte D'Ivoire with the theme of
(a) Beat Air Pollution
(b) Ecosystem Restoration
 (c) Solutions to Plastic Pollution
(d) None of the above
141. Namdapha National Park of Arunachal Pradesh is a _____ reserve.
 (a) Tiger
(c) Leopard
(b) Elephant
(d) Hornbill
142. Which town is situated on the confluence of 'Sipu' and 'Yomgo rivers' ?
 (a) Aalo
(c) Boleng
(b) Basar
(d) Daporijo

NORTHEAST PSC

143. _____ was the first Speaker of Arunachal Assembly.
(a) Gegong Apang (b) P. K. Thungan
(c) Nokmey Namati (d) D. Ering
144. Dibang river bridge is the _____ longest bridge above water in India.
(a) 1st (b) 2nd (c) 3rd (d) 5th
145. College of Horticulture and Forestry is situated at _____ in Arunachal Pradesh.
(a) Itanagar (b) Aalo
(c) Ziro (d) Pasighat
146. Who are the beneficiaries covered under the PM SVANidhi Scheme ?
(a) Artisans (b) Farmers
(c) Street Vendors (d) Start-Ups
147. In which of the following city Prime Minister Shri Narendra Modi unveiled the bust of Mahatma Gandhi recently ?
(a) Nagasaki (b) Hiroshima
(c) Sydney (d) Kyoto
148. 'Bihu' is dance form of the State of
(a) Andhra Pradesh (b) Bihar
(c) Assam (d) Gujarat
149. The '100 Days 100 Pays' campaign was launched recently by
(a) Government of India (b) Reserve Bank of India
(c) State Bank of India (d) Postal Department of India
50. Kyiv is the capital of which country ?
(a) Belarus (b) Armenia (c) Khazakisthan (d) Ukraine



Answer Key for IEM - 5/23 (Set - C)

| Question No. | Ans. Key |
|--------------|----------|
| 1 | b |
| 2 | a |
| 3 | d |
| 4 | b |
| 5 | c |
| 6 | d |
| 7 | * |
| 8 | c |
| 9 | b |
| 10 | c |
| 11 | c |
| 12 | c |
| 13 | c |
| 14 | d |
| 15 | a |
| 16 | b |
| 17 | b |
| 18 | a |
| 19 | d |
| 20 | d |
| 21 | c |
| 22 | d |
| 23 | d |
| 24 | c |
| 25 | a |
| 26 | a |
| 27 | b |
| 28 | c |
| 29 | c |
| 30 | a |
| 31 | c |
| 32 | d |
| 33 | c |
| 34 | d |
| 35 | b |
| 36 | d |
| 37 | b |
| 38 | d |
| 39 | d |
| 40 | a |
| 41 | c |
| 42 | a |
| 43 | b |
| 44 | b |
| 45 | c |
| 46 | b |
| 47 | b |
| 48 | b |
| 49 | c |
| 50 | c |

| Question No. | Ans. Key |
|--------------|----------|
| 51 | d |
| 52 | a |
| 53 | c |
| 54 | d |
| 55 | a |
| 56 | a |
| 57 | c |
| 58 | a |
| 59 | b |
| 60 | d |
| 61 | a |
| 62 | b |
| 63 | a |
| 64 | b |
| 65 | b |
| 66 | b |
| 67 | d |
| 68 | d |
| 69 | b |
| 70 | b |
| 71 | c |
| 72 | a |
| 73 | a |
| 74 | d |
| 75 | a |
| 76 | b |
| 77 | c |
| 78 | b |
| 79 | b |
| 80 | a |
| 81 | a |
| 82 | a |
| 83 | c |
| 84 | a |
| 85 | b |
| 86 | c |
| 87 | b |
| 88 | c |
| 89 | c |
| 90 | c |
| 91 | a |
| 92 | c |
| 93 | d |
| 94 | b |
| 95 | b |
| 96 | b |
| 97 | c |
| 98 | a |
| 99 | a |
| 100 | a |

| Question No. | Ans. Key |
|--------------|----------|
| 101 | a |
| 102 | c |
| 103 | b |
| 104 | c |
| 105 | d |
| 106 | d |
| 107 | d |
| 108 | b |
| 109 | c |
| 110 | a |
| 111 | a |
| 112 | c |
| 113 | d |
| 114 | d |
| 115 | c |
| 116 | c |
| 117 | b |
| 118 | b |
| 119 | c |
| 120 | d |
| 121 | b |
| 122 | a |
| 123 | b |
| 124 | a |
| 125 | d |
| 126 | d |
| 127 | a |
| 128 | c |
| 129 | a |
| 130 | c |
| 131 | a |
| 132 | c |
| 133 | c |
| 134 | a |
| 135 | b |
| 136 | c |
| 137 | c |
| 138 | d |
| 139 | b |
| 140 | c |
| 141 | a |
| 142 | a |
| 143 | c |
| 144 | b |
| 145 | d |
| 146 | c |
| 147 | b |
| 148 | c |
| 149 | b |
| 150 | d |

* Two marks awarded to all as multiple correct answer options were provided.