

SECTION – A (General Awareness)

1. Where was the 7th edition of Japan-India Maritime Exercise 2023 (JIMEX 23) held ?

- (a) Mumbai
(b) ~~Visakhapatnam~~
(c) Delhi
(d) Lucknow

1

2. Which of the following disease/s is very common amongst the livestock ?

- (a) ~~Foot and Mouth Disease~~
(b) Brucellosis
(c) Both (a) and (b)
(d) None of the above

3. The Supreme Court of India established under this Act

- (a) ~~Regulating Act, 1773~~
(b) Charter Act, 1813
(c) Government of India Act, 1935
(d) Government of India Act, 1919

4. Match the following :

Years	Events
A. 1917	i. Gandhi-Irwin Pact
B. 1929	ii. Civil Disobedience Movement begins
C. 1930	iii. Champaran Movement
D. 1931	iv. Purna Swaraj

A B C D

(a) i ii iii iv

(b) iii i ii iv

(c) ii iv i iii

(d) ~~iii~~ iv ii i

5. The police action which merged Hyderabad with Indian Union is

- (a) Operation Eagle Hunting
(b) Operation All Out
(c) Operation Polo
(d) Operation Endeavour



NORTHEAST PSC



YET ANOTHER PROOF OF EXCELLENCE!!!

20+ Selections in Personal Assistant (Stenographer) 2024

Highest from a single institute

- ONLINE AND OFFLINE COURSES AVAILABLE:
- MENTORED 10000+ ASPIRANTS
- QUALITY TEACHING AT AFFORDABLE PRICES
- EXPERIENCED FACULTIES

PREMIUM INSTITUTE FOR APPSC AND APSSB EXAMS



MUM TAMUT
2000014



GERIK BASAR
2000056



MISS ETER RIBA
2000074



BINAISI CHAI
2000059



MINU ANQU
2000049



REVA GAMLIN
2000030



MIBOM KOMUT
2000005



MARJUM LOMI
2000068



DURIK BAGRA
2000067



TAPI YAKU
2000069



TABE NAINA
2000057



TAILYANG MAMPI
2000052



HAGE MAMUNG
2000035



KAGO SUNKA
2000063



PURA ASHA
2000055



RANG FOSHING MARNDW
2000040



TAMHE NENKHA
2000053



GEYI INGO
2000075



NAKO NONYA
2000077



JUMNU TAIPODIA
2000004



KARI ESHT
2000036



YABIT TAGA
2000006



TUNDAK ANQU
2000062



ETER RIBA
2000074



BARJONI RATAN
2000019

Call/WhatsApp: +91-9233789183 / 9863184505 / 8076535685

Our 3 Students in Top 10 Rank



6. Which of the following is/are true about the money bill ?
- Rajya Sabha can either approve the bill or suggest changes.
 - Rajya Sabha can reject the bill.
 - Amendments to the bill, suggested by Rajya Sabha, may or may not be accepted by the Lok Sabha.

(a) ii and iii
~~(c) i and iii~~ (b) Only iii
~~(d) All of the above~~

7. Which one of the following subject is not included in Union List ?

(a) Railway (b) Banking
(c) Agriculture (d) Foreign Trade

8. Which of the following satellite launch vehicle (Rocket) of ISRO nicknamed as Bahubali ?

~~(a) GSLV Mk III~~ (b) RLV-TD
(c) SLV-3 (d) None of the above

9. Which of the following is/are part of the Directive Principles of State Policy of Indian Constitution ?

i. Uniform civil code.
ii. Prohibition of consumption of alcoholic liquor.
iii. Promotion of cottage industries.

(a) ii and iii (b) Only ii
(c) Only i (d) All of the above

10. Who won the Men's singles title in Australian Open 2024 ?

~~(a) Novak Djokovic~~ (b) Daniil Medvedev
(c) Jannik Sinner (d) Carlos Alcaraz

11. India won the first Olympic gold medal in Men's field Hockey in

(a) 1960 (b) 1928
(c) 1985 (d) 1996

12. The State which won the Khelo India Youth Games 2023 is

(a) Madhya Pradesh (b) Maharashtra
(c) Punjab (d) Tamil Nadu



13. Golden rice is biofortified to address

~~(a) Vitamin B deficiency~~

~~(c) Vitamin A deficiency~~

(b) Vitamin E deficiency

(d) None of the above

14. The famous Badami caves are located in the State of

(a) Maharashtra

(c) Karnataka

(b) Tamil Nadu

~~(d) Andhra Pradesh~~

15. Which of the following is/are true about the layers of the atmosphere ?

~~i. The mesosphere lies above the stratosphere.~~

ii. The ionosphere is located between 80 and 400 km above the mesopause.

iii. The ionosphere contains electrically charged particles known as ions.

~~(a) ii and iii~~

(c) Only iii

(b) Only i

(d) All of the above

16. Which one of the following is/are true about Bank Rate ?

(a) The RBI can influence money supply by changing the rate at which it gives loans to the Commercial Bank is called the Bank Rate in India.

(b) A fall in the bank rate can increase the money supply.

(c) Both (a) and (b)

(d) None of the above

17. Which of the following cell organelle is also called as power house of the cell ?

~~(a) Lysosome~~

~~(c) Mitochondria~~

(b) Nucleus

(d) None of the above

18. Which blood group is called as 'Universal recipient' ?

(a) A

~~(c) B~~

(b) O

~~(d) AB~~

19. Who is the first cricketer in the history to be given a "timed out" dismissal in the International Cricket ?

~~(a) Nicholas Pooran~~

~~(c) Angelo Mathews~~

(b) Babar Azam

(d) None of the above



20. Two bones are connected to each other by the connective tissue called
- (a) Cartilage
 - ~~(b) Ligament~~
 - (c) Areolar
 - (d) None of the above



21. XBB1.16 is related to which disease ?
- (a) Covid-19
 - ~~(b) Influenza~~
 - ~~(c) Cancer~~
 - ~~(d) None of the above~~

22. Arrange the following elements in decreasing order of their atomic number.
- (a) Hydrogen > Sodium > Aluminium > Carbon
 - (b) Aluminium > Hydrogen > Carbon > Sodium
 - (c) Carbon > Aluminium > Hydrogen > Sodium
 - ~~(d) Aluminium > Sodium > Carbon > Hydrogen~~



23. The acid found in the Tamarind is
- (a) Acetic
 - (b) Oxalic
 - (c) Methanoic
 - ~~(d) Tartaric~~




24. Match the following :

UN Secretary Generals				Country
A. Trygve Lie				i. Sweden
B. Dag Hammarskjöld				ii. Myanmar
C. U. Thant				iii. Austria
D. Kurt Waldheim				iv. Norway

	A	B	C	D
(a)	iv	i	ii	iii
(b)	iii	iv	ii	i
(c)	ii	i	iv	iii
(d)	ii	iv	i	iii

25. India and Pakistan signed the Tashkent Agreement in
- ~~(a) 1972~~
 - (b) 1958
 - (c) 1966
 - (d) 1962





NEW BATCH



for CGL | CSL | CHSL (APSSB Exams)

ATTEND FREE DEMO CLASS

- Elementary Maths
- Intelligence Reasoning
- General Knowledge
- General English



➤ **140+ SELECTED IN CSL 2023**

➤ **20+ SELECTED IN CHSL 2023**

➤ **25 SELECTED IN STENOGRAPHER 2024**

*Based on Latest
Pattern of
APSSB*

Next could be you!!!!

Our Features:-

- Live Classes
- Backup in recordings of Live classes
- PDF Notes & Practice Questions
- 2000 GK Booster Questions (with Video Solutions)
- FREE TEST SERIES (with Video Solutions)

 **Call / WhatsApp:** 

+91-8076535685 / 6009526445

SECTION - B

(General Intelligence and Reasoning Ability)

26. Complete the following analogy.

Mass : Kilogram :: Temperature : ?

- (a) Candela
- (c) Gram



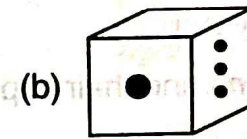

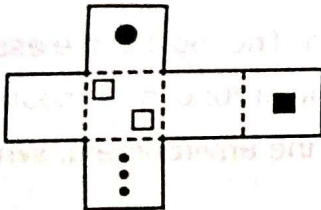
- (b) Length
- (d) Kelvin

27. Choose the odd one from the following.

- ~~(a) June~~
- (c) January

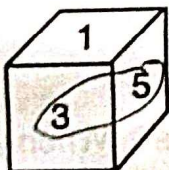
- (b) March
- (d) December

28. If the following net was folded into a cube, which of the given shapes would it look like ?



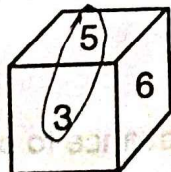
29. Three different positions of dice are shown below. Which number appears on the face opposite to the number 6 ?

(i)



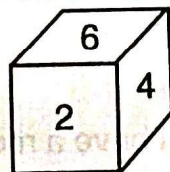
(a) 4

(ii)



(b) 3

(iii)



~~(c) 1~~

(d) 5

30. If the digits in the number 42168674 are arranged in the descending order from left to right, then what will be the product of the digits which are 3rd from the left end and 4th from the right end in the new arrangement ?

(a) 24

(b) 48

(c) 36

(d) 28



31. If each of the vowel in the word 'TEMPLATE' is changed to the next vowel and each consonant is changed to the previous consonant in the English alphabet and then the letters in the word so formed are arranged in reverse alphabetical order from left to right, which of the following will be the 6th letter from the left end of the new arrangement of letters thus formed ?
(a) I (b) N (c) K (d) P
32. If the digits in the number 8911743 are arranged in the ascending order from left to right, then what will be the difference of the digits which are 2nd from the right end and 5th from the left end in new arrangement ?
(a) 2 (b) 3 (c) 1 (d) 0
33. The teachers of a school want to hold an essay competition. The topic of the essay has to be such that it resonates with the current affairs going around in the country. At the same time, they want to highlight the issues facing the environment. Which of the following topics is suitable for the test ?
(a) New Forest Policy Act
(b) Upcoming elections and their expected results
(c) Indus Civilization
(d) Panchayat elections and farmer issues
34. You have a busy day on Monday, what can you do to help yourself ?
(a) Tell others about what you have to do
(b) Just go with the flow, and try to complete all that you can think of
(c) Make a to-do-list and rank the activities in order of importance
(d) None of the above
35. You have a big project and you have a month in advance to complete it. When you should start it ?
(a) Start researching ideas and do a little bit of the project each day until you finish
(b) A week before its due
(c) Two weeks before its due
(d) Print and copy a project from the internet



NORTHEAST PSC

Maths & Reasoning Batches

ONLINE BATCH



Do WhatsApp/Call at +91-8076535685
for joining course

INCLUDES

- ✓ Result Oriented Approach
- ✓ Basic to Advance
- ✓ Live and Recorded Class
- ✓ Based on new pattern

USEFUL FOR

- ✓ APSSB (LDC/ UDC/ CONSTABLE/ MTS)
- ✓ CSAT
- ✓ SSC
- ✓ BANK



AMARJEET SIR

SPECIAL OFFER

MATHS ONLY

(6 Months Validity)

FEE: ~~₹ 2000/-~~

₹ 2500/-

REASONING ONLY

(6 Months Validity)

FEE: ~~₹ 2000/-~~

₹ 2500/-

MATHS + REASONING

FEE: ~~₹ 5000/-~~

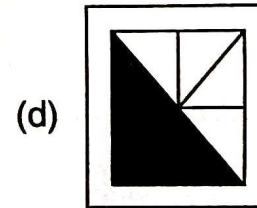
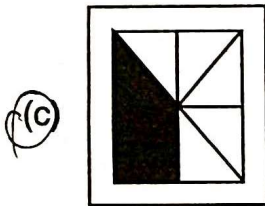
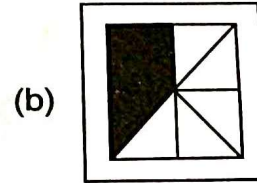
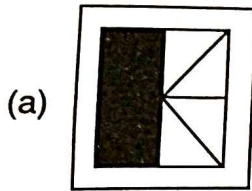
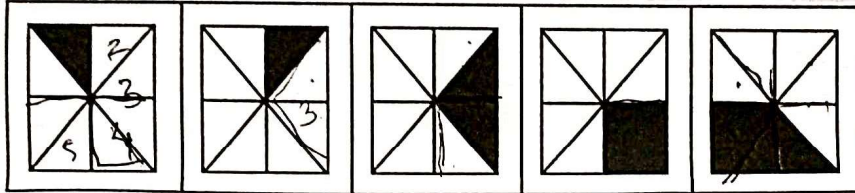
₹ 4500 - NEW STUDENTS

₹ 4000 - OLD STUDENTS

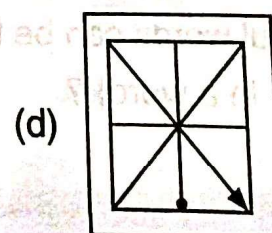
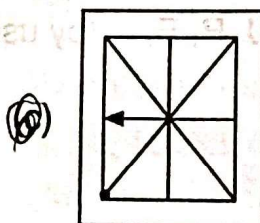
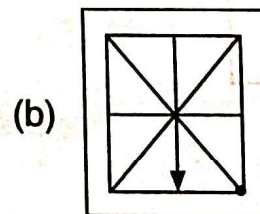
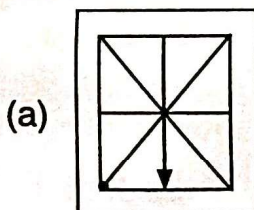
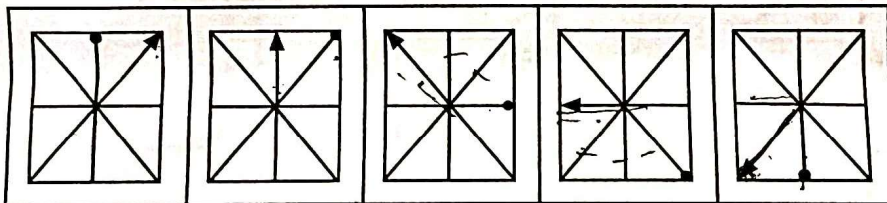


Direction (Q. No. 36 – 38) : Observe the problem figures given and select one figure from the alternatives which will continue the same pattern following in the problem figures.

36. Problem Figures :



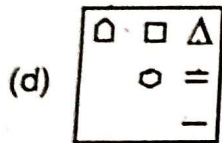
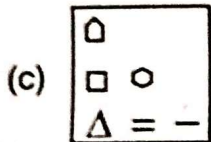
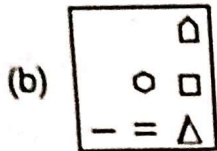
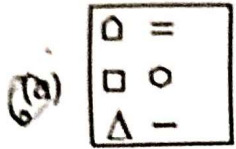
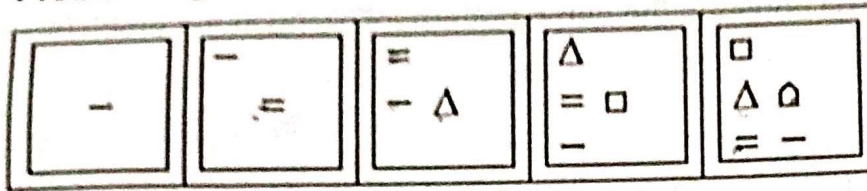
37. Problem Figures :



Join APSSB Full Course (GK+Eng+Maths+Reasoning)
WhatsApp/Call: 8076535685

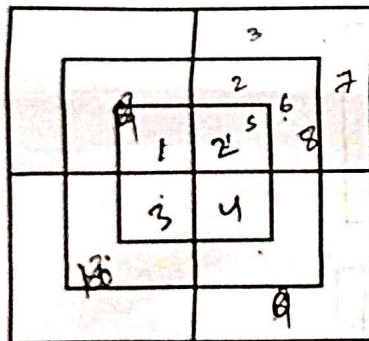


38. Problem Figures :



**Join APSSB Full Course
 (GK+Eng+Maths+Reasoning)
 WhatsApp/Call: 8076535685**

39. How many number of squares are there in the given figure ?



(a) 8

(c) 15

~~(b) 12~~

(d) 18

40. How many meaningful words can be formed using the letters U, R, E, L (by using each letter only once in a word) ?

(a) One

(c) Nine

(b) Two

(d) Three

41. Arrange the following words in a logical order.

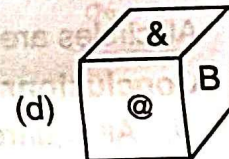
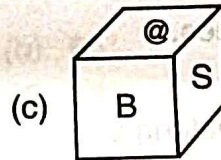
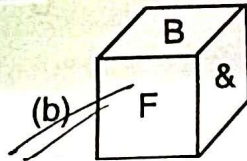
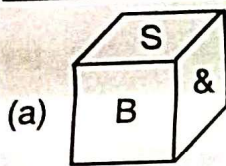
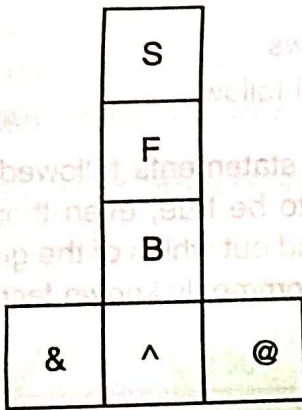
1. Zetabyte
2. Kilobyte
3. Gigabyte
4. Terabyte
5. Megabyte

- (a) 2, 5, 3, 4, 1 (b) 3, 4, 2, 5, 1 (c) 1, 2, 4, 3, 5 (d) 1, 2, 3, 4, 5

42. How is my brother's father's father's daughter's daughter related to me ?

- (a) Sister (b) Sister-in-law (c) Aunt (d) Cousin

43. Select the cube that can be formed by folding the given sheet.



44. Choose the odd pair from the following.

- (a) 23, 29 ~~(b) 19, 25~~ (c) 13, 17 (d) 3, 5

45. Find the next number in the following series.

1, 2, 6, 30, 210, ?

- ~~(a) 1890~~ (b) 1640 (c) 2310 (d) 2410

46. Find the wrong number in the following series.

3, 12, 16, 80, 85, 504, 516

- (a) 12 (b) 16 (c) 504 (d) 516

47. In a certain code language, if the word 'POSITIVE' is coded as 'EVITISOP', then how is the word 'SENSATION' coded ?

- (a) NOTIASNES (b) ONITASNES
(c) NOITASNES (d) NOITSANES

48. Consider the following statement to be true and then consider two conclusions and decide which of them logically follow(s) beyond a reasonable doubt from the information given in statement.

Statement :

The Vedas are packed with the greatest wisdom; a German scholar, Max Muller published the first scholarly translation of the Vedas.

Conclusions :

- I. Germans discovered wisdom.
II. The Vedas was first written in German.

- (a) Only I follows (b) Only II follows
(c) Neither I nor II follows (d) Both I and II follow

Direction (Q. No. 49 and 50) : The questions consist of two statements followed by two conclusions marked (I) and (II). Consider the statements to be true, even though they seem to be variance with the commonly known facts and find out which of the given conclusions logically follow(s) the statements disregarding the commonly known facts.

49. **Statements :**

All squares are circles.

All circles are rectangles.

Conclusions :

I. All squares are rectangle.

II. All rectangles are squares.

- (a) Only I follows (b) Only II follows
(c) Both I and II follow (d) Neither I nor II follows

50. **Statements :**

All gloves are shirts.

Some shirts are stamps.

Conclusions :

I. Some gloves are stamps.

II. Some shirts are gloves.

- (a) Only I follows (b) Only II follows
(c) Both I and II follow (d) Neither I nor II follows

NORTHEAST PSC

YET ANOTHER PROOF OF EXCELLENCE!!!

140+ SELECTIONS IN CSL 2023

- Online and Offline Courses Available:
- Mentored 10000+ Aspirants
- Quality Teaching at Affordable Prices
- Experienced Faculties

Premium
Institute for
APPSC and
APSSB Exams



Call/WhatsApp: +91-9233789183 / 9863184505 / 8076535685

Visit Us: NEPSC Building 2nd Floor, Opp Civil
Secretariat, Near Bank of Maharashtra, Itanagar (A.P.)



SECTION - C
 (Arithmetical and Numerical Ability)

51. Value of $\tan\theta \times \cot\theta \times \sin\theta \times \operatorname{cosec}\theta$ is

- (a) -1 (b) 2 (c) 0 ~~(d) 1~~

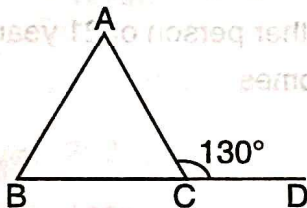
52. The value of $\sin^2 30^\circ + 1$ is

- (a) $\frac{5}{2}$ (b) $\frac{5}{3}$
 (c) $\frac{5}{4}$ (d) None of these

53. The centroid of a triangle is the

- (a) Point of intersection of its perpendicular bisectors
 (b) Point of intersection of its altitude
 (c) Point of intersection of its medians
~~(d) Point of intersection of its angle bisectors~~

54. In the following figure, if $\angle ABC = 2\angle ACB$, $\angle ACD = 130^\circ$, then $\angle BAC =$

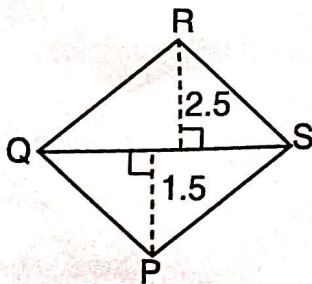


- (a) 50° (b) 65°
~~(c) 30°~~ (d) 60°

55. The graph of $x - y = 0$ is a line

- (a) Parallel to x-axis (b) Parallel to y-axis
~~(c) Passing through (0, 0)~~ (d) None of these

56. Find the area of the following quadrilateral PQRS, if $QS = 5.5$ cm.



- (a) 11 cm^2 (b) 10 cm^2 (c) 9 cm^2 (d) 8.5 cm^2



57. If tangents PA and PB from a point P to a circle with centre 'O' are inclined to each other at an angle of 80°, then $\angle POA =$

- (a) 50°
- (b) 60°
- (c) 70°
- (d) 80°

58. A cylinder has a total surface area of 440 sq. cm. The sum of its radius and its height is 10 cm. Its volume is (Use $\pi = \frac{22}{7}$)

- ~~(a) 384 cm³~~
- (b) 462 cm³
- (c) 434 cm³
- (d) 476 cm³

59. If a train runs at an average speed of 28 km per hour for 2 hours, at an average speed of 30 km per hour for next 3 hours and at 40 km per hour for last $1\frac{1}{2}$ hours, then the total distance travelled by the train in $6\frac{1}{2}$ hours is

- ~~(a) 206 km~~
- (b) 196 km
- (c) 216 km
- (d) 180 km

60. The average age of 12 girls in a locality is 8 years. If another person of 21 years joins the locality, then the average age of 13 people becomes

- (a) 10 years
- (b) 8.5 years
- ~~(c) 9 years~~
- (d) 13 years

61. A is ahead of B by 5 km. If they are walking in same direction, when will B overtake if A walks 4 km/hr and B walks 5 km/hr ?

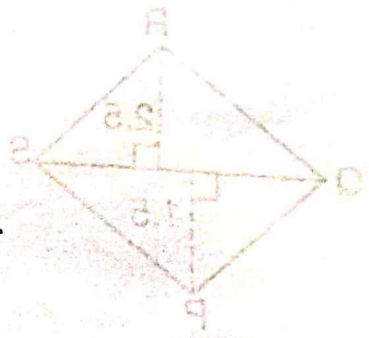
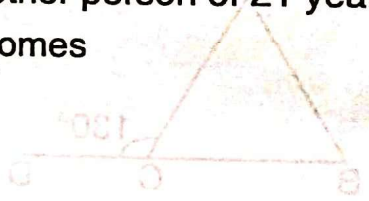
- ~~(a) After 5 hours~~
- (b) After 3 hours
- (c) After 9 hours
- (d) Never

62. A 100 meters long train is running at a speed of 30 kmph. In what time will it pass a man standing near the line ?

- (a) 10 sec.
- ~~(b) 12 sec.~~
- (c) 15 sec.
- (d) 60 sec.

63. A tangent to a circle intersects it in _____ point(s).

- (a) 1
- ~~(b) 2~~
- (c) 3
- (d) infinite



Join APSSB Full Course (GK+Eng+Maths+Reasoning)

WhatsApp/Call: 8076535685

64. 4 common tangents can be drawn for _____ circles.

- ~~(a) Intersecting~~
- (b) Touching
- ~~(c) Non-intersecting and non-touching~~
- (d) None of these

65. $(x + y)^2 - (x - y)^2$ after simplification is

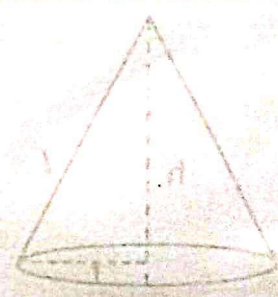
- (a) $2(x^2 + y^2)$
- (b) $2xy$
- ~~(c) $4xy$~~
- (d) $-4xy$

66. The angle subtended by a chord AB on the circumference of a circle is 90° . If the length of the chord AB is 16 cm, then radius of the circle is of length

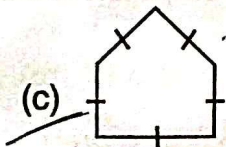
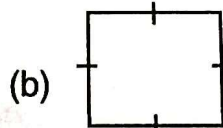
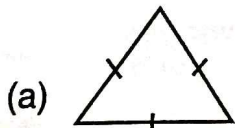
- (a) 8 cm
- ~~(b) 9 cm~~
- (c) 12 cm
- (d) 10 cm

67. The sum of all the interior angles of a polygon of 5 sides is

- ~~(a) 360°~~
- ~~(b) 540°~~
- (c) 180°
- (d) 500°



68. Which among the following is not a regular polygon ?



69. If the perimeter and area of a circle are numerically equal, then the radius of the circle is

- (a) 2 units
- ~~(b) π units~~
- (c) 4 units
- (d) 7 units

2 \sqrt{r}



70. Which of the following is not an example for right prism ?

- (a) Dice
- (b) Rubik's cube
- (c) Cuboid
- (d) ~~Cone~~

Join APSSB Full Course (GK+Eng+Maths+Reasoning)
WhatsApp/Call: 8076535685

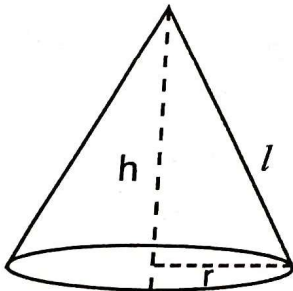
71. If a sphere and a hemisphere have the same radius, then the ratio of their volumes is

- (a) 3 : 2
- (b) ~~2 : 1~~
- (c) 1 : 2
- (d) 2 : 3

72. The volume of the right circular cone with radius 6 cm and height 7 cm is

- (a) 792 cm³
- (b) ~~264 cm³~~
- (c) 200 cm³
- (d) None of these

73. The curved surface area of the following cone is



$2\pi r h$
 $2 \times \frac{22}{7} \times 7 \times 7$

- (a) ~~$2\pi r l$~~
- (b) $\pi r l$
- (c) $\pi r^2 l$
- (d) πr^2

74. If lateral surface area of a cylinder is 94.2 cm² and its height is 5 cm, then radius of the base is (Use $\pi = 3.14$)

- (a) 5 cm
- (b) 3 cm
- (c) 4 cm
- (d) None of these

75. The radius of a sphere whose surface area is 154 cm², is

- (a) 3.5 cm
- (b) 4 cm
- (c) 4.2 cm
- (d) 1.4 cm

3.5
 $\sqrt{154}$



SECTION – D

(Test of English Language and Comprehension)

Direction (Q. No. 76 to 79) : In each of the following questions, a sentence has been given in Active/Passive Voice. Out of the four given alternatives, select the one which best expresses the same sentence in Passive/Active voice.

76. Who did this ?

- (a) This was done by who ?
- (b) By who this was done ?
- (c) By whom this was done ?
- (d) By whom was this done ?

77. Please close the gate.

- (a) You please close the gate.
- (b) You close the gate yourself.
- (c) Let the gate be closed by you.
- (d) Please be the gate closed by you.

78. The movie will create tension in the society.

- (a) Tension would be created in the society by the movie.
- (b) The tension shall be created in the society by the movie.
- (c) Tension will be created in the society by the movie.
- (d) The tension can be created in the society by the movie.

79. The scorpion stung the farmer.

- (a) The farmer was stung by the scorpion.
- (b) The farmer had been stung by the scorpion.
- (c) The farmer is stung by the scorpion.
- (d) The farmer has been stung by the scorpion.

Direction (Q. No. 80 to 82) : Choose the correctly spelt word from the following alternatives.

- 80. (a) faranheat
- (c) fahrenheit

- (b) foreignheat
- (d) fahrenheit

A

Join APSSB Full Course (GK+Eng+Maths+Reasoning)

WhatsApp/Call: 8076535685

- 81. (a) fourfathers
- (b) forfathers
- (c) ~~forefathers~~
- (d) forefaders

- 82. (a) fairwell
- (b) fairwale
- (c) fairwel
- (d) ~~farewell~~

Direction (Q. No. 83 to 85) : Choose the correct antonym of the following words from the alternatives given below it.

83. Impulsive

- (a) obstinate
- (b) biased
- (c) ~~assist~~
- (d) cautious

84. Liberty

11

- (a) ~~bondage~~
- (b) gloomy
- (c) expedite
- (d) partial

85. Agitated

- (a) superior
- (b) calm
- (c) cold
- (d) self-processed

11

86. Choose the correct meaning of the underlined idiomatic expression in the following sentence, from among the alternatives given below it.

My best friend keeps back nothing from me.

- (a) ~~conceal~~
- (b) influence
- (c) note
- (d) discern



87. Choose the correct meaning of the following idiom from the alternatives given below it.

To talk shop.

- (a) To talk a lot
- (b) To use phrases peculiar to one's employment
- (c) To like to shop
- (d) To lie

Direction (Q. No. 88 to 91) : Change the following into reported speech and choose the correct alternative from given below it.

88. Kiran said, "What a dreadful thing !"

- (a) Kiran exclaimed that it was a dreadful thing.
- (b) Kiran said that it was a dreadful thing.
- (c) Kiran said that it is a dreadful thing.
- (d) Kiran exclaimed that it is a dreadful thing.

89. Preetham said, "I do not wish to see any of you; go away."

- (a) Preetham said that he did not wish to see any of them and ordered them to go away.
- (b) Preetham said that I did not wish to see any of you and said to go away.
- (c) Preetham said that he had not wished to see any of them and asked them to go away.
- (d) Preetham said that he does not wish to see any of them and asked them to go away.

90. Sunder said, "I will go to my sister's house today."

- (a) Sunder said that he went to his sister's house that day.
- (b) Sunder said that he has to go to his sister's that day/house that day.
- (c) Sunder said that he goes to his sister's house that day.
- (d) Sunder said that he would go to his sister's house that day.

1

Join APSSB Full Course (GK+Eng+Maths+Reasoning)

WhatsApp/Call: 8076535685

91. Naina said to Sunil, "I will not be going for the class."
- (a) Naina told Sunil that she will not have gone for the class.
(b) Naina told Sunil that she does not go for the class.
(c) Naina told Sunil that she would not be going for the class.
(d) Naina told Sunil that she had not been going for the class.

Direction (Q. No. 92 to 94) : Fill up the blanks in the following sentences using appropriate prepositions from among the alternatives given below them.

92. David was heartbroken _____ Mary's indifference to him.
- (a) at (b) on
(c) over (d) upon
93. Convergence _____ all the routes occurred at this point.
- (a) of (b) from
(c) with (d) at
94. The teacher was pleased _____ the children, so she took them to the picnic.
- (a) at (b) with
(c) on (d) by
95. Fill in the blank with suitable article from the alternatives given below it.

This is _____ news to me.

(a) a (b) an
(c) the (d) No article required

Direction (Q. No. 96 and 97) : Fill up the blank in the following sentence using the correct form of the word given in bracket out of the four given alternatives.

96. The recent earthquake is _____ (compare) to the one that occurred last year.
- (a) comparable (b) comparing
(c) comparison (d) comparence

Join APSSB Full Course (GK+Eng+Maths+Reasoning)

WhatsApp/Call: 8076535685

97. He _____ (die) at a ripe old age.
- (a) died (b) dying
(c) had died (d) will die

98. Choose the synonym of the following word from the alternatives given below it.

Drench

- (a) dust (b) rain
(c) soak (d) dry

Direction (Q. No. 99 and 100) : In these questions, the first and the last sentences of a paragraph are numbered 1 and 6. The sentences (P), (Q), (R) and (S), when properly sequenced, form a coherent paragraph along with 1 and 6. Read the sentences to find out which of the alternatives given below them is the correct answer.

99. 1. A foolish wolf saw a horse grazing in a field and decided to eat him.
P. The wolf went and stood behind the horse wondering if the horse's tail was the passport. Just then he received such a kick on his face that two teeth shot out of his mouth.
Q. If you come and stand behind me, I will show you what a passport is
R. "What is the passport?" asked the wolf.
S. When the horse saw the wolf, it said "you cannot eat me, I have a passport".
6. As the wolf lay dazed, the horse made a good escape.
- (a) PSQR (b) SRQP (c) RQSP (d) PQRS
100. 1. Speech was the first means of conveying information.
P. Thirdly, printing helped in dissemination of knowledge in a permanent form.
Q. Then, writing as a means introduced a capacity for storing information.
R. Computer is the only medium that cannot only store but also analyse information to make decisions.
S. However, all these are passive media.
6. Therefore, computer is hailed as the fourth information revolution.
- (a) QPSR (b) PQSR (c) QRPS (d) QPRS